

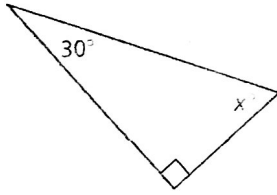
NAME _____

DATE _____

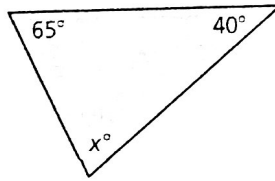
Duke HOMEWORK

Find the measures of the interior angles.

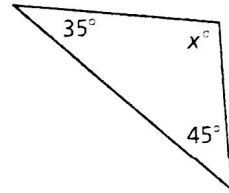
4.



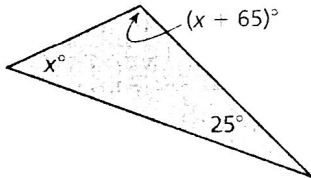
5.



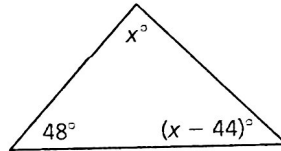
6.



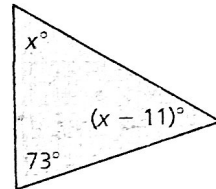
7.



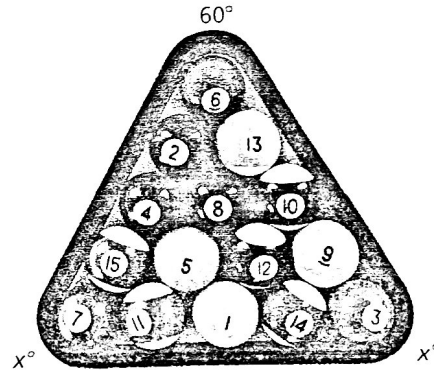

8.



9.



10. BILLIARD RACK Find the value of x in the billiard rack.



11. NO PARKING The triangle with lines through it designates a no parking zone. What is the value of x ?

6

5

10

7

9

11