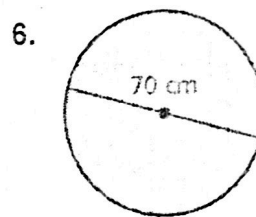
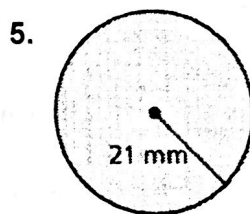
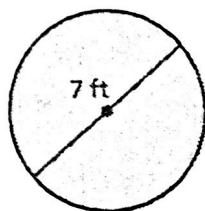
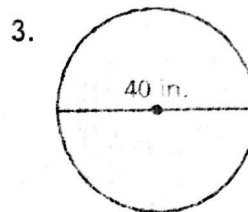
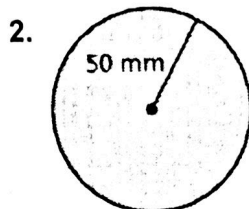
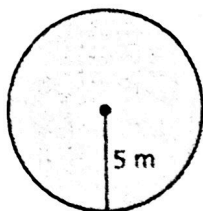

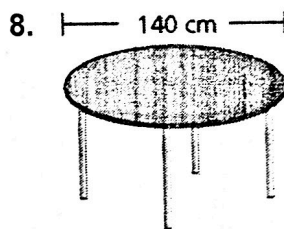
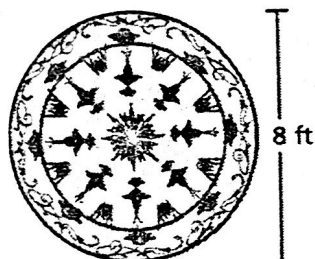


8.3 Practice A

Find the area of the circle. Use 3.14 or $\frac{22}{7}$ for π .



Find the area of the object.



10. You use the compass to draw a circle. What will be the area of the circle?



11. What fraction of a square inch is the area of one side of a penny? Use $\frac{22}{7}$ for π . Write your answer in simplest form.



12. To make a pizza, you spread pizza sauce over all but a 1-inch area around the outside edge as shown. What area of the crust is covered with sauce?

