

Name _____ Date _____

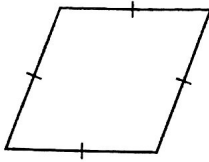
7.4

Practice

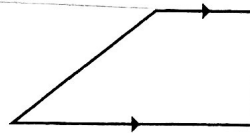
For use after Lesson 7.4

Classify the quadrilateral.

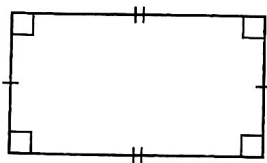
1.



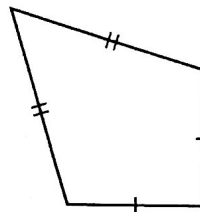
2.



3.

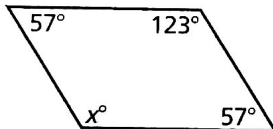


4.

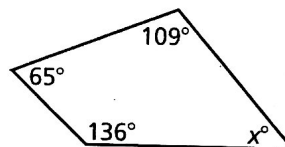


Find the value of x .

5.



6.



7. For a science fair, you are displaying your project on a trapezoidal piece of poster board. What is the measure of the missing angle?

